

Name :

Teacher :

Official Homework 2 Angles

Created by Mr Lafferty
St. Ninian's High School

This homework covers topics

Score

Basic Number Operations

Z and F Angles & Triangle

34

Basic Angle Properties

Mixed Properties

Basic Angle Properties

Mixed Properties

Teacher Comments :

Pupil's Comment :

1. Carry out the following instructions. (NON - CALCULATOR QUESTION)

(a) $18 - 3.9 + 3.61$

Working :

(b) 44×8

Working :

(c) $1750 \div 500$

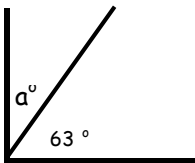
Working :

(d) $\frac{6}{7}$ of 42

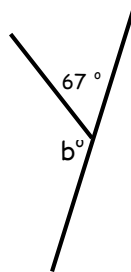
Working :

(5 marks)

2. Find the missing angles.



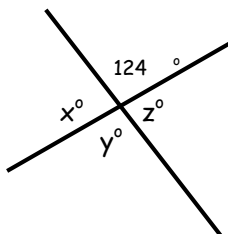
Working :



Working :

(4 marks)

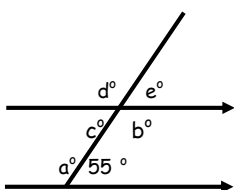
3. Find all the missing angles



Working :

(3 marks)

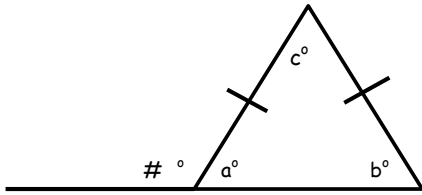
4. Find all the missing angles.



Working :

(5 marks)

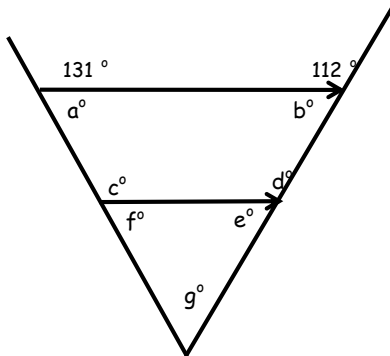
5. Find all the missing angles.



Working :

(4 marks)

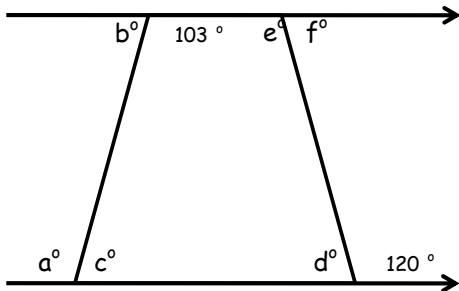
6. Find all the missing angles.



Working :

(7 marks)

(b)



Working :

(6 marks)

Total marks 34