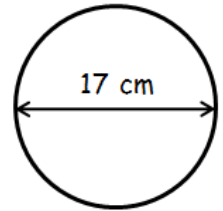


Level 4+ Homework - The Circle 1

(Remember use the π button)

1. (a) Find the area of the circle given the diameter opposite. (nearest whole number)

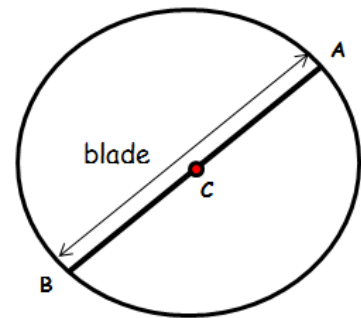


- (b) Find the circumference of the circle. (nearest centimetre)
-

6 marks

2. The circular fan has area 5281.02 m^2

- (a) Find the radius of the blade. (nearest whole number)
(nearest metre)

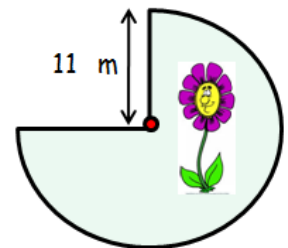


- (b) Find the diameter of the circle. (nearest whole number)
(nearest metre)
-

4 marks

Q3. A flower bed is the shape of a circle with a quarter removed.

Find the perimeter of the flower bed.



4 marks

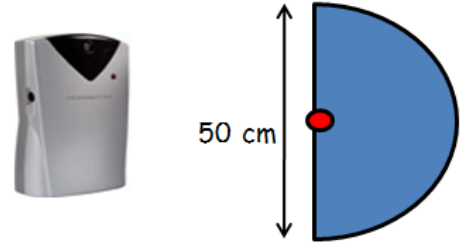
Level 4+ Homework - The Circle 1

(Remember use the π button)

4. A security beam is in the shape of a semi-circle.

(a) Find the area of the beam.
(nearest whole number)

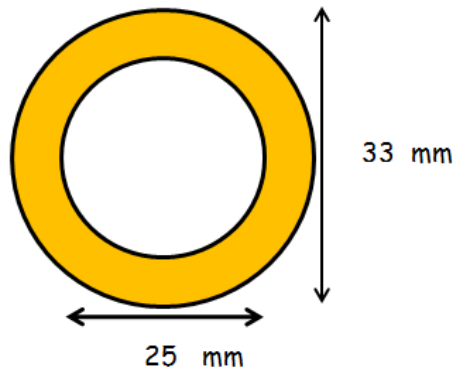
(b) Find the **TOTAL** perimeter of the beam.
(nearest centimetre)



5 marks

5. A Gold ring is shown opposite.

Calculate the area of gold shown.
(nearest whole number)



4 marks

Total 23